





LENGTH QUIZ

Name: _____

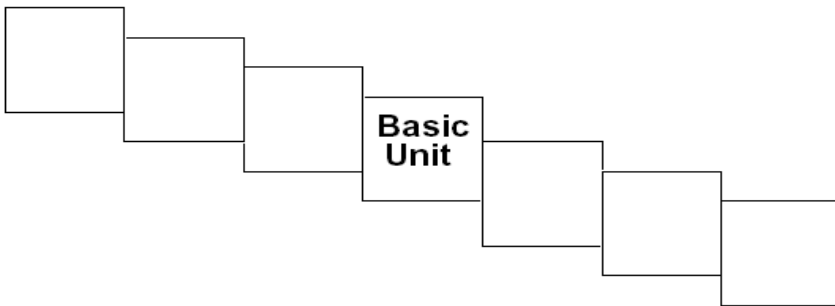
Use a ruler to measure the following lines in centimeters and then convert to millimeters.

1.  _____ cm _____ mm
2.  _____ cm _____ mm
3.  _____ cm _____ mm
4.  _____ cm _____ mm
5.  _____ cm _____ mm
6.  _____ cm _____ mm

Fill in the blank with the best possible word:

7. The distance between two points is _____.
8. The SI base unit for length is the _____.

Label the chart with the correct prefix.








Convert the measurements.

- 9) 2000 mm = _____ m 10) 104 km = _____ m

LENGTH QUIZ

Name: _____

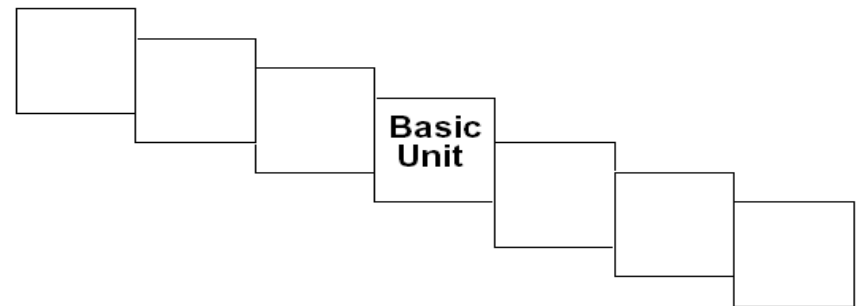
Use a ruler to measure the following lines in centimeters and then convert to millimeters.

1.  _____ cm _____ mm
2.  _____ cm _____ mm
3.  _____ cm _____ mm
4.  _____ cm _____ mm
5.  _____ cm _____ mm
6.  _____ cm _____ mm

Fill in the blank with the best possible word:

7. The distance between two points is _____.
8. The SI base unit for length is the _____.

Label the chart with the correct prefix.



Convert the measurements.

- 9) 2000 mm = _____ m 10) 104 km = _____ m