










# Phases of the Moon Quiz

Name: \_\_\_\_\_










- Put the phases of the moon in order beginning and ending with the new moon.
- Place the name of each phase on the line next to each moon.

<input type="checkbox"/>		_____
<input type="checkbox"/>		_____
<input type="checkbox"/>		_____
<input type="checkbox"/>		_____
<input type="checkbox"/>		_____
<input type="checkbox"/>		_____
<input type="checkbox"/>		_____
<input type="checkbox"/>		_____
<input type="checkbox"/>		_____

# Phases of the Moon Quiz

Name: \_\_\_\_\_

- Put the phases of the moon in order beginning and ending with the new moon.
- Place the name of each phase on the line next to each moon.

<input type="checkbox"/>		_____
<input type="checkbox"/>		_____
<input type="checkbox"/>		_____
<input type="checkbox"/>		_____
<input type="checkbox"/>		_____
<input type="checkbox"/>		_____
<input type="checkbox"/>		_____
<input type="checkbox"/>		_____
<input type="checkbox"/>		_____